

As per C-20 syllabus



D-CET

Diploma Common Entrance Test

- Introduction to D-CET Entrance Exam
- Exam Pattern, Important Dates & Syllabus
- D-CET 2023 & 2024 Question Paper with Solutions



T.T.T Academy

ABOUT

J.P.S EDUCATIONAL & CHARITABLE TRUST[®]

Over the years, J.P.S Educational & Charitable Trust has been providing books and educational facilities to a number of students across different parts of Karnataka. It has provided about 10000 books till date. Through the assistance and support of T.T.T Academy, the trust has taken an initiative to provide entrance exam training courses and materials. It also provides books with detailed information on D-CET.

The Trust's main focus is on those students who are in need of such facilities and are in economically backward class. The institution helps the students in understanding the underlying difficulties of the competitive exams like D-CET, to enhance their understanding skills and train them for the same. It also helps them in understanding the complete application process and helps them in choosing the right college based on their rankings.

Why T.T.T ACADEMY ?



SANTHRUPTH H. R.

**1st
RANK
State
Topper
2023
from
T.T.T
Academy**

- **T.T.T Methodology** : Starting with the very basics and strengthening the students at fundamentals of D-CET.
- **Study Material** : Structured & research based study material for both theory & MCQ's.
- **Test System** : Regular Mock test on every sunday.
- A year long course programme for DCET by resource persons and subject experts.
- All competitive exams for KPSC, KPTCL, KPCL, BMRCL, ISRO, HAL, BEL, KSRTC, BHEL, DRDO, **JE & AE** posts exams.
- Orientation sessions for parents to involve them in our pursuit.
- Regular offline and online live coaching classes.
- Experienced faculties who have been providing supporting students score top results.
- CC camera surveillance on the campus.

INFRASTRUCTURE



AC Class Room



Smart Board Class Room



Offline & Online Live Class

Message from the Chairman



Dr. Savina J.P B.E., M.E., Ph.D
(Managing Director)

"Education is the first stepping stone to an open mind, a life of dignity and growth of each individual and humankind at large". Technical Teaching & Training Academy opens its doors for those with a passion for learning and also provide a platform to gear the students to be focused and successful individuals of tomorrow. The academy admits deserving students in order to support the aspirations and ambitions of young people, particularly those from disadvantaged background, who is to secure a better future. In our academy, you will be guided by experienced and dedicated faculties, who are trained to help students resolve both academic and personal difficulties. Our library offers you to access compressive resources. We encourage you to imbibe the decorum of our institution during your stay as they will play a pivotal role in helping you achieve success in your study and thereafter in your career. GOOD Luck...!

OUR D-CET STUDY MATERIAL

Book available on :



amazon

Flipkart



tttpublications.com

**All Book Stores
Across Karnataka**

Why our Study Material ?

- Every year, **8000+** Students Study from T.T.T Publication's D-CET Books.
- **92+** Questions from our books have appeared in the **D-CET 2023** exam.
- **93+** Questions from our books have appeared in the **D-CET 2024** exam.



T.T.T Academy

11 Years
OF SHARING
KNOWLEDGE

ADMISSIONS OPEN FOR DIPLOMA CET (D-CET)

Diploma CET Course Details

Long Term Course

- **Duration** : Till Exam Date.
- Weekend Classes + Daily 2 hr Classes + 4-5 hrs of Classes in Crash Course.
- Offline & Online live classes.
- Mock Tests.
- Recorded Classes Available.

Short Term Course

- **Duration** : After 5th Sem. Exams.
- Every day 2 hr Classes + 4-5 hrs of Classes in Crash Course.
- Offline & Online live classes.
- Mock Tests.
- Recorded Classes Available.

Crash Course

- **Duration** : After 6th Sem. Exams.
- Every day 4-5 hrs of Classes.
- Offline & Online live classes.
- Mock Tests.
- Recorded Classes Available.

OUR STUDENTS TESTIMONIALS



★★★★★

TTT Institution has provided excellent guidance for DCET preparation, ensuring my success and securing 1st rank in Karnataka State. I am also thankful to my friends who played a crucial role in helping me achieving this milestone. Special gratitude to Savin Sir and the dedicated team for their effective online coaching classes. The regular mock tests helps us identify and rectify our mistake and with no doubt TTT Institution has helped many students across Karnataka to secure good ranking in DCET by providing both online and offline classes with well-equipped classroom, study material and infrastructure!!

Santhrupth H R
State 1st Rank Holder

Thank you so much sir

For everything from "Book to Coaching".

It helped a lot to crack D-CET and proud to say i secured 7th Rank, not only D-CET success but also i motivated for future competition , these 2 months of coaching had changed alot in my mindset.

Srujan Buddar
State 7th Rank Holder



★★★★★



FOR FREE DEMO CLASSES CONTACT US : 9986869970



8, MEI Colony, Peenya 3rd Phase, Bengaluru - 560 058



tttinstitution@gmail.com



www.tttacademics.com



9986869966 | 9986869955 | 9986869910

Diploma CET

ENTRANCE EXAM DETAILS

SYLLABUS

Question Paper with Solutions
[2023 & 2024]

**Engineering Mathematics, Statistics & Analysis,
Project Management Skills, IT Skills, FEEE**



T.T.T. ACADEMY

Trusted No. 1 D-CET Coaching Centre as per Students

INTRODUCTION TO D-CET ENTRANCE EXAM

DCET - Diploma Common Entrance Test which is conducted by the Karnataka Examination Authority (KEA). The entrance exam is a requirement for enrolment in the second-year undergraduate engineering programmes offered through the lateral entry programme. In Karnataka, these programmes are offered at both day and evening colleges.

D-CET EXAM PATTERN

DCET Conducting Authority	Karnataka Examination Authority
Frequency of Conduct	1 yearly once
Exam level	State level
Languages	English
Application Mode	Online
Mode of Exam	Offline / Online
Exam Duration	3 hours
Number of Subjects	5
Total Questions	100
Total Marks	100
Mode of Counselling	Online / Offline

D-CET TENTATIVE IMPORTANT DATES

Events	Dates
Application form starts	1 st Week of May
Last date for application submission	3 rd Week of May
D-CET exam date	Month of June
Counselling date	Month of July

DCET 2024 - Question Paper & Solutions

1. If $A = \begin{bmatrix} 3 & -2 \\ 4 & 1 \end{bmatrix}$ and $A - B = \begin{bmatrix} 5 & -3 \\ 4 & 6 \end{bmatrix}$, then matrix B is _____.

- a) $\begin{bmatrix} -3 & 2 \\ -4 & -1 \end{bmatrix}$ b) $\begin{bmatrix} -5 & 3 \\ -4 & -6 \end{bmatrix}$
 c) $\begin{bmatrix} -2 & 1 \\ 0 & -5 \end{bmatrix}$ d) $\begin{bmatrix} 2 & -1 \\ 0 & 5 \end{bmatrix}$

Ans : (c)

$$\text{Given, } A = \begin{bmatrix} 3 & -2 \\ 4 & 1 \end{bmatrix} \text{ and } A - B = \begin{bmatrix} 5 & -3 \\ 4 & 6 \end{bmatrix}$$

$$\therefore \begin{bmatrix} 3 & -2 \\ 4 & 1 \end{bmatrix} - \begin{bmatrix} 5 & -3 \\ 4 & 6 \end{bmatrix} = B$$

$$B = \begin{bmatrix} -2 & 1 \\ 0 & -5 \end{bmatrix}$$

2. If $\begin{bmatrix} 3 & -4 \\ 9 & 2 \end{bmatrix} \begin{bmatrix} x \\ y \end{bmatrix} = \begin{bmatrix} 10 \\ 2 \end{bmatrix}$, then the values of x and y are _____

- a) $\left(\frac{2}{3}, -2\right)$ b) $\left(2, \frac{2}{3}\right)$
 c) $\left(-2, \frac{2}{3}\right)$ d) $\left(\frac{-2}{3}, 2\right)$

Ans : (a)

$$\text{Given } \begin{bmatrix} 3 & -4 \\ 9 & 2 \end{bmatrix} \begin{bmatrix} x \\ y \end{bmatrix} = \begin{bmatrix} 10 \\ 2 \end{bmatrix}$$

$$\begin{bmatrix} (3x) + (-4y) \\ (9x) + (2y) \end{bmatrix} = \begin{bmatrix} 10 \\ 2 \end{bmatrix}$$

$$\begin{bmatrix} 3x - 4y \\ 9x + 2y \end{bmatrix} = \begin{bmatrix} 10 \\ 2 \end{bmatrix}$$

$$\therefore 3x - 4y = 10$$

$$9x + 2y = 2 \rightarrow 2$$

$$3x - 4y = 10$$

$$18x + 4y = 4$$

Adding

$$21x = 14$$

$$x = \frac{14}{21}$$

$$x = \frac{2}{3}$$

$$\therefore 3x - 4y = 10$$

$$3\left(\frac{2}{3}\right) - 4y = 10$$

$$2 - 4y = 10$$

$$2 - 10 = 4y$$

$$-8 = 4y$$

$$\frac{-8}{4} = y$$

$$\therefore y = -2$$

3. If $A = \begin{bmatrix} -2 & 6 \\ -2 & 3 \end{bmatrix}$, then A^{-1} is _____.

- a) $\frac{1}{18} \begin{bmatrix} 3 & -6 \\ 2 & -2 \end{bmatrix}$ b) $\frac{1}{6} \begin{bmatrix} 3 & -6 \\ 2 & -2 \end{bmatrix}$
 c) $\begin{bmatrix} 3 & -6 \\ 2 & -2 \end{bmatrix}$ d) $\frac{1}{6} \begin{bmatrix} -2 & 6 \\ -2 & 3 \end{bmatrix}$

Ans : (b)

$$\text{Given } A = \begin{bmatrix} -2 & 6 \\ -2 & 3 \end{bmatrix}, |A| = \begin{vmatrix} -2 & 6 \\ -2 & 3 \end{vmatrix} = -6 - (-12)$$

$$|A| = -6 + 12 = 6$$

$$\text{W.K.T. } A^{-1} = \frac{1}{|A|}$$

$$\therefore \text{Adjoint of } A = \begin{bmatrix} 3 & -6 \\ 2 & -2 \end{bmatrix} \text{ and}$$

$$\therefore A^{-1} = \frac{1}{6} \begin{bmatrix} 3 & -6 \\ 2 & -2 \end{bmatrix}$$

4. If $x + y = 3$ and $2x + 3y = 8$ are the linear equations, then x and y are _____.

- a) $(1, -2)$ b) $(1, 2)$
c) $(-1, -2)$ d) $(-1, 2)$

Ans : (b)

$$x + y = 3 \rightarrow \text{(i) and } 2x + 3y = 8 \rightarrow \text{(ii)}$$

$$x + y = 3 \rightarrow \times 2$$

$$\cancel{2x} + 2y = 6$$

$$\cancel{2x} + 3y = 8$$

$$-y = -2$$

$$y = 2$$

Put $y = 2$ in equation (i)

$$x + y = 3$$

$$x + 2 = 3$$

$$x = 3 - 2$$

$$x = 1$$

5. If the straight line is $2y = 3x + 4$, then the y-intercept is _____

- a) 4 b) 2
c) $-\frac{4}{3}$ d) -2

Ans : (b)

$$\text{Given } 2y = 3x + 4$$

$$0 = 3x - 2y + 4$$

$$3x - 2y + 4 = 0$$

$$\text{y - intercept} = \frac{-c}{b} = \frac{-4}{-2} = 2$$

6. The acute angle of inclination made by the line $3x - 3y - 2 = 0$ with positive x-axis is _____.

- a) 135° b) 30°
c) 45° d) 0°

Ans : (c)

$$\text{Given } 3x - 3y - 2 = 0$$

$$\text{Slope, } m = \frac{-a}{b} = \frac{-3}{-3} = 1$$

$$\text{w.k.t } m = \tan 45^\circ = 1 \quad \therefore \text{inclination } \theta = 45^\circ$$

7. The slope of a straight line passing through the points $(1, 2)$ and $(5, -3)$ is _____.

- a) $\frac{5}{4}$ b) $\frac{1}{6}$
c) $-\frac{1}{4}$ d) $-\frac{5}{4}$

Ans : (d)

$$\text{Given } (x_1, y_1) = (1, 2) \text{ and } (x_2, y_2) = (5, -3)$$

$$\text{Slope } m = \frac{y_2 - y_1}{x_2 - x_1} = \frac{-3 - 2}{5 - 1} = \frac{-5}{4}$$

8. If the slope of the straight line is $-\frac{3}{2}$ and

y-intercept is $\frac{5}{2}$, then the equation of the straight line is _____.

- a) $3x + 2y - 5 = 0$ b) $3x - 2y - 5 = 0$
c) $3x + 2y + 5 = 0$ d) $3x - 2y + 5 = 0$

Ans : (a)

$$\text{Given, slope, } m = -\frac{3}{2} \text{ and y - intercept, } c = \frac{5}{2}$$

(Slope - intercept form)

$$y = mx + c$$

$$y = \frac{-3}{2}x + \frac{5}{2}$$

$$y = \frac{-3x + 5}{2}$$

$$2y = -3x + 5$$

$$3x + 2y - 5 = 0$$

9. The line perpendicular to the straight line $5x - y + 1 = 0$ and passing through the point $(2, 3)$ is _____.

- a) $x - 5y - 17 = 0$ b) $x + 5y - 13 = 0$
 c) $x + 5y - 17 = 0$ d) $x + 5y + 13 = 0$

Ans : (c)

Given line $5x - y + 1 = 0$ and point $(2, 3) = (x_1, y_1)$

$$\text{Slope of perpendicular line} = \frac{b}{a} = \frac{-1}{5}$$

(slope – point form)

$$y - y_1 = m(x - x_1)$$

$$(y - 3) = \frac{-1}{5}(x - 2)$$

$$5y - 15 = -1x + 2$$

$$1x + 5y - 15 - 2 = 0$$

$$x + 5y - 17 = 0$$

10. The value of $\cot 660^\circ$ is ____.

- a) $\frac{-1}{\sqrt{3}}$ b) $\sqrt{3}$
 c) $\frac{1}{\sqrt{3}}$ d) $-\sqrt{3}$

Ans : (a)

Given, $\cot 660^\circ$

$$\cot 660^\circ = \cot (360^\circ + 300^\circ)$$

$$= \cot 300^\circ$$

$$= \cot (270^\circ + 30^\circ)$$

$$= -\tan 30^\circ$$

$$\cot 660^\circ = -\frac{1}{\sqrt{3}}$$

11. The value of $\cos 75^\circ$ is ____.

- a) $\frac{\sqrt{3} + 1}{2\sqrt{2}}$ b) $\frac{\sqrt{3} + 1}{\sqrt{3} - 1}$
 c) $\frac{\sqrt{3} - 1}{2\sqrt{2}}$ d) $\frac{\sqrt{3} - 1}{\sqrt{3} + 1}$

Ans : (c)

$$\cos 75^\circ = \cos (45 + 30^\circ)$$

$$= \cos (A + B)$$

$$= (\cos A \cdot \cos B) - (\sin A \cdot \sin B)$$

$$= (\cos 45^\circ \times \cos 30^\circ) - (\sin 45^\circ \times \sin 30^\circ)$$

$$= \left(\frac{1}{\sqrt{2}} \times \frac{\sqrt{2}}{2} \right) - \left(\frac{1}{\sqrt{2}} \times \frac{1}{2} \right)$$

$$= \frac{\sqrt{3}}{2\sqrt{2}} - \frac{1}{2\sqrt{2}} = \frac{\sqrt{3} - 1}{2\sqrt{2}}$$

12. If a ladder is inclined to the wall with base angle 30° , then the angle in radians is ____

- a) $\frac{\pi}{3}$ b) $\frac{\pi}{4}$
 c) $\frac{\pi}{2}$ d) $\frac{\pi}{6}$

Ans : (d)

Given angle $\theta = 30^\circ$

$$\text{Angle in radian} = \frac{\pi}{180^\circ} \times \theta = \frac{\pi}{180^\circ} \times 30^\circ$$

$$= \frac{\pi}{6} \text{ radian}$$

13. If $\sin A = \frac{3}{5}$ and $\cos B = \frac{12}{13}$, then $\cos (A - B)$ is ____.

- a) $\frac{-33}{65}$ b) $\frac{63}{65}$
 c) $\frac{-63}{65}$ d) $\frac{33}{65}$

Ans : (b)

$$\text{Given } \sin A = \frac{3}{5} = \frac{\text{opp}}{\text{Hyp}}, \quad \cos B = \frac{12}{13} = \frac{\text{adj}}{\text{hyp}}$$

Triplets

3	4	5
---	---	---

opp ↑ Hyp

adj

Triplets

5	12	13
---	----	----

↑ Adj Hyp

opp

$$\therefore \cos A = \frac{\text{Adj}}{\text{Hyp}} = \frac{4}{5}$$

$$\sin B = \frac{\text{Opp}}{\text{Hyp}} = \frac{5}{13}$$

$$\cos(A-B) = (\cos A \cdot \cos B) + (\sin A \cdot \sin B)$$

$$= \left(\frac{4}{5} \times \frac{12}{13} \right) + \left(\frac{3}{5} \times \frac{5}{13} \right)$$

$$= \frac{48}{65} + \frac{15}{65}$$

$$= \frac{48+15}{65} = \frac{63}{65}$$

14. If $y = 2 \sin x - 4 \cot x + e^{-x} + 7$, then $\frac{dy}{dx}$ is ____.

- a) $-2 \cos x - 4 \operatorname{cosec}^2 x - e^{-x} + 7x$
 b) $2 \cos x + 4 \operatorname{cosec}^2 x - e^{-x}$
 c) $2 \cos x + 4 \operatorname{cosec}^2 x + e^x + 7$
 d) $2 \sin x - 4 \operatorname{cosec}^2 x + e^x$

Ans : (b)

$$\text{If } y = 2 \sin x - 4 \cot x + e^{-x} + 7$$

$$\frac{dy}{dx} = 2 \cos x - 4 (-\operatorname{cosec}^2 x) - e^{-x}$$

$$= 2 \cos x + 4 \operatorname{cosec}^2 x - e^{-x}$$

15. If $y = \left(x + \frac{1}{x} \right)^2$, $\frac{dy}{dx}$ is:

- a) $x^2 + \frac{1}{x^2} + 2$ b) $2x + \frac{1}{x^2}$
 c) $2x - \frac{2}{x^3}$ d) $2x + \frac{1}{x}$

Ans : (c)

$$\text{If } y = \left(x + \frac{1}{x} \right)^2$$

$$y = x^2 + \frac{1}{x^2} + \frac{2x}{x}$$

$$y = x^2 + \frac{1}{x^2} + 2$$

$$\frac{dy}{dx} = 2x - \frac{2}{x^3} + 0 = 2x - \frac{2}{x^3}$$

16. If $y = e^{3x} + e^{7x}$, then $\frac{d^2y}{dx^2}$ at $x = 0$ is ____.

- a) 10 b) 58
 c) 1 d) 2

Ans : (b)

$$\text{If } y = e^{3x} + e^{7x} \text{ at } x = 0$$

$$\frac{dy}{dx} = 3e^{3x} + 7e^{7x}$$

$$\frac{d^2y}{dx^2} = 3.3 e^{3x} + 7.7 e^{7(0)}$$

$$= 3.3 e^{3(0)} + 7.7 e^{3(0)} \quad \text{w.k.t, } e^0 = 1$$

$$= 9(1) + 49(1)$$

$$= 58$$

17. If $y = \log(\sec x + \tan x)$, then $\frac{dy}{dx}$ is ____.

- a) $\sec x + \tan x$ b) $\frac{1}{\sec x + \tan x}$
 c) $\sec x$ d) $\sec^2 x$

Ans : (c)

$$y = \log(\sec x + \tan x)$$

$$\frac{dy}{dx} = \frac{1}{\sec x + \tan x} \cdot \frac{d}{dx}(\sec x + \tan x)$$

$$= \frac{\sec x \cdot \tan x + \sec^2 x}{\sec x + \tan x}$$

$$= \frac{\sec x(\sec x + \tan x)}{\sec x + \tan x} = \sec x$$

18. $\int (3x^2 + 2x + 2)^{3/2} (3x + 1) dx$ is ____.

- a) $\frac{(3x+5)}{5} + C$ b) $\left(\frac{3x-5}{5} \right) + C$
 c) $\left(\frac{3x^2 - 2x - 2}{5} \right)^{5/2}$ d) $\frac{(3x^2 + 2x + 2)^{5/2}}{5} + C$

Ans : (d)

$$\int (3x^2 + 2x + 2)^{3/2} (3x + 1) dx$$

By logic

$$\frac{2}{5} \left(\frac{3x^2 + 2x + 2}{2} \right)^{5/2} + C \quad \left| \quad \frac{dy}{dx} = 6x + 2 + 0 \right.$$

$$\left(\frac{3x^2 + 2x + 2}{5} \right)^{5/2} + C \quad \left| \quad \frac{dy}{dx} = 2(3x + 1) \right.$$

19. The integral of $x^3 + \frac{1}{x} + e^x$ is _____

a) $\frac{x^4}{4} + \log x - e^x + C$

b) $\frac{x^4}{4} + \log x + e^x + C$

c) $3x^2 - \frac{1}{x^2} + e^x + C$

d) $3x^2 - \frac{1}{x^2} - e^x + C$

Ans : (b)

$$\int x^3 + \frac{1}{x} + e^x dx$$

$$= \frac{x^4}{4} + \log x + e^x + C$$

20. $\int x \sin x dx =$ _____.

a) $x \cos x - \sin x + C$ b) $-x \cos x + \sin x + C$

c) $x \cos x + \sin x + C$ d) $-x \cos x - \sin x + C$

Ans : (b)

$$\int x \sin x dx$$

$$= +[x] [-\cos] - [1] [-\sin x] + \underbrace{\begin{bmatrix} 0 \\ 1 \end{bmatrix} \begin{bmatrix} 1 \\ 0 \end{bmatrix}}_0$$

$$= -x \cos x + \sin x + c$$

21. Which of the following are not obstacles in project management?

- a) Project complexities b) Project risks
c) Changes in technology
d) Early identification of problems

Ans : (d)

Early identification of problems is the benefit of project management and it is not an obstacle.

22. _____ provides guidance as well as direction to the project and he/she is *not* a part of the project team.

- a) CEO b) Project Manager
c) Team Leader d) Project Consultant

Ans : (d)

Project consultant guides the project but not a part of the project team.

23. Repair of dam in case of damage due to natural calamities is an example of _____.

- a) Normal project b) Crash project
c) Risky project d) Disaster project

Ans : (d)

Project performed due to effect of natural calamities is known as disaster project.

24. _____ refers to a detailed description of the expected outcome of a project.

- a) Project scope b) Project operation
c) Project objective d) Project process

Ans : (c)

Project objective illustrate the tasks you execute to achieve the result.

25. The process of dividing the project into number of tasks in order to carry out the effective project administration is:

- a) PPM b) WBS
c) PEP d) Project diary

Ans : (b)

Work Breakdown structure (WBS) is the process of dividing the project work into number of tasks.

26. The project _____ relieves a project team from most regular work such as planning, tracking and reporting responsibility.

- a) Manager b) CEO
- c) Administration d) Leader

Ans : (c)

Project administration relieves a project team.

27. The use of authority to channelize the activities of the project on desired lines is referred to as _____.

- a) Project direction b) Project coordination
- c) Project communication
- d) Project execution

Ans : (a)

Project direction channelize the activities of the project on desired lines.

28. _____ illustrates total project work into divisions of major work packages.

- a) PERT b) CPM
- c) WBS d) PEP

Ans : (c)

WBS divides the work into major packages

29. _____ is a condition wherein a construction or manufacturing project does not complete well within its prescribed time schedule.

- a) Time analysis b) Time estimate
- c) Time overrun d) Cost overrun

Ans : (c)

Overrun of a time is a condition where project cannot be completed within its prescribed time schedule.

30. A project _____ creates damages or adverse effects to either project activities or project deliverables.

- a) Failure b) Undertaken
- c) Risk d) Analysis

Ans : (c)

Damages or uncertainties affects the project is known as risk.

31. Identify the correct risk analysis which has typically one variable changed at a time

- a) Sensitivity Analysis
- b) Scenario Analysis
- c) Best and Worst Case Analysis
- d) Simulation Analysis

Ans : (a)

Sensitivity Analysis where studies done by changing one variable at a time.

32. Risk usually _____ as the project progresses.

- a) Increases b) Reduces
- c) Remains same d) Becomes negligible

Ans : (b)

As project progress towards goal risk usually reduces.

33. In 'SMART', the letter R stands for _____.

- a) Realistic b) Reliable
- c) Reasonable d) Relation

Ans : (a)

The full form of SMART.

S - Specific
M - Measurable
A - Achievable
R - Realistic
T - Timely

34. _____ is a step-by-step process of collecting, recording and organising information about project results.

- a) Project planning
- b) Project evaluation
- c) Project scheduling
- d) Project monitoring

Ans : (b)

Project evaluation is a process where information are collected recorded and organised to check about project results.

35. Which one of the following is *not* a policy of a project?

- a) Extent of work given to outside contractors
- b) Number of contractors to be employed
- c) Monitoring the progress of project
- d) Terms of contract

Ans : (c)

Monitoring the progress of project is the phase of project life cycle, not a policy,

36. The scheduling, 'EST' stands for:

- a) Easiest Start Time b) Earliest Start Time
- c) Earliest Schedule Time
- d) Earliest Schedule Technique

Ans : (b)

EST - Earliest Start Time

37. _____ is an expert in measuring, confirming, investigating and reporting status of a project.

- a) Project Guide b) Project Reviewer
- c) Project Auditor d) Project Advisor

Ans : (c)

Project Auditor is the one who reports the status of a project.

38. _____ is the time estimate if there are no hurdles in an activity.

- a) Pessimistic time b) Optimistic time
- c) Most likely time d) Expected estimated time

Ans : (b)

Optimistic time is where project time is scheduled based on quickest completion of time without any risk.

39. _____ is the last phase of the project life cycle which reports overall achievements of a project in terms of defined performance measures.

- a) Project closure b) Project initiation
- c) Project execution d) Project planning

Ans : (a)

Project closure is the final phase of the project life cycle.

40. The objective of network analysis in a project is to _____.

- a) Minimise total project duration
- b) Minimise total project cost
- c) Minimise production delays
- d) Minimise manpower requirements

Ans : (a)

Minimize total project duration is the objective of network analysis.

41. What is the output of the following?

a = 10

if (a > 1) then

print "TWENTY"

else

print "TEN"

- a) 10 b) TEN
- c) TWENTY d) No Output

Ans : (c)

Assignment: $a = 10$

This line assigns the value 10 to the variable a
Conditional statement: if ($a > 1$) then

This line starts a conditional statement. The condition being checked is whether the value of a is greater than 1. In this case, it is (since 10 is greater than 1).

Print statement: print "TWENTY" If the condition is true, this line would print the word "TWENTY"

Else statement : else This line indicates the start of the else block of the conditional statement.

Print statement : print "TEN" This line would print the word "TEN" if the condition in the if statement is not true.

Since the value of a is 10, which is greater than 1, the condition in the if statement is true.

42. The symbol used to connect two parts of a big flowchart is _____

- a) Oval b) Rectangle
- c) Diamond d) Circle

Ans : (d)

In flowcharts, circles are used as connector symbols to show the continuation of the flow across multiple pages or through a complex chart.

43. Which symbol is used to represent start or stop in a flowchart?

- a) Rectangle b) Diamond
- c) Oval d) Circle

Ans : (c)

In standard flowcharting practices, the oval symbol is used to represent the start and end points of a process

44. What does CSS stand for?

- a) Colourful Style Sheet
- b) Cascading Style Sheet
- c) Creative Style Sheet
- d) Computer Style Sheet

Ans : (b)

The fullform of CSS is cascading style sheet

45. Which of the following is *not* a web browser?

- a) Google Chrome b) Netscape Navigator
- c) Safari d) Apache

Ans : (d)

Google Chrome: Google Chrome is a popular web browser developed by Google

Netscape Navigator: Netscape Navigator was one of the first popular web browsers

Safari: Safari is a web browser developed by Apple.

Apache: Apache is a web server software, not a web browser.

46. What is the correct syntax to change the background colour with CSS?

- a) background – color = "purple";
- b) background – color : purple;
- c) background – color = orange
- d) change-background-color : purple

Ans : (b)

background-color is a property in CSS that specifies the background color of an element.

The colon : separates the property name from the value.

purple is the value assigned to the property, which in this case sets the background color to purple.

47. Which HTML tag gives a scrolling effect of a given text?

- a) <div> b) <scroll>
- c) <marquee> d) <effect>

Ans : (c)

The <marquee> tag is an HTML tag that is used to create scrolling text

48. ERP package will handle _____ business functionality / functionalities.

- a) One b) Two
- c) Three d) Multiple

Ans : (d)

ERP integrates all the functional unit.

49. Which one is a type of organizational structure?

- a) Responsibility structure
- b) Behavioural structure
- c) Functional structure
- d) Relational structure

Ans : (c)

Functional structure is a type of organisational structure where it works on the basis of functional units.

50. The _____ describes how an actor uses a system to accomplish a particular goal for describing the activities.

- a) Process case b) Work case
- c) Use case d) Sub process

Ans : (c)

Use case describes how an employee uses a system.

51. Which of the following is not a characteristic of First-generation ERP system?

- a) They were based on mainframe computer
- b) They focused on accounting and finance
- c) They used centralized database
- d) They supported real-time data processing

Ans : (d)

First generation ERP stand alone applications designed to automate specific functions such as inventory management, accounting and order processing.

52. Which cloud service model enables users to develop, run, manage application without worrying about underlying infrastructure?

- a) IAAS b) PAAS c) SAAS d) NAAS

Ans : (b)

Platform as a Service (PaaS): PaaS provides a platform for developing, deploying, and managing applications. Users don't have to worry about managing the underlying infrastructure.

53. Which of the following is *not* a Google application?

- a) Google Docs b) Google slides
- c) Google Sheets d) Google Word

Ans : (d)

Google Word is not a Google application. The correct name for Google's word processing application is Google Docs

54. IoT is a _____.

- a) Network of sensors
- b) Network of objects in a ring structure
- c) Network of virtual objects
- d) Network of physical objects embedded with sensors.

Ans : (d)

IoT refers to the network of physical objects or "things" that are embedded with sensors, software, and other technologies for the purpose of connecting and exchanging data with other devices and systems over the internet.

55. _____ is a file storage and synchronization service developed by Google which provides complete office tools with cloud storage.

- a) Google Colab b) Google Drive
- c) Google Meet d) AWS Cloud

Ans : (b)

Google Drive is a file storage and synchronization service developed by Google that provides cloud storage, file sharing, and collaborative editing. It integrates with Google's office suite of tools, such as Google Docs, Google Sheets, and Google Slides

56. Which of the following is not a security issue in a personal computer?

- a) Ransomware Attack
- b) Data Breach
- c) Code Injection
- d) IoT

Ans : (d)

The Internet of Things (IoT) is a network of physical objects that are embedded with sensors, software, and other technologies to connect and exchange data with other devices and systems over the internet.

57. Which of the following is *not* a firewall?

- a) Packet filtering b) Stateful inspection
- c) Panda d) Circuit Level Gateway

Ans : (c)

Panda is not a type of firewall; it is a brand name associated with cybersecurity products, including antivirus software. The other options-packet filtering, stateful inspection, and circuit-level gateway-are all types of firewalls.

58. "S" in HTTPS stands for _____.

- a) Safe b) Secure
- c) System d) Server

Ans : (b)

In HTTPS, the "S" stands for Secure. HTTPS is a protocol for secure communication over a computer network.

59. The process used to get an output 43205 from a given input "DCTE" is _____

- a) Hashing b) Compression
c) Decompression d) Encryption

Ans : (a)

Hashing is a process that converts an input of any size into a fixed-length alphanumeric string. In this case, "DCTE" would be converted into a string of numbers and letters, potentially resulting in something like "43205"..

60. $a = 10$

$b = 20$

$a = a + b$

$b = a - b$

$a = a - b$

The final values of a and b are:

- a) $a = 30, b = 10$ b) $a = 30, b = 20$
c) $a = 20, b = 10$ d) $a = 20, b = 30$

Ans : (c)

- $a = 10$: This assigns the value 10 to variable a .
- $b = 20$: This assigns the value 20 to variable b .
- $a = a + b$: This adds the current value of b (which is 20) to the current value of a (which is 10) and stores the result back into a . So now, a becomes 30 ($10 + 20$).
- $b = a - b$: This subtracts the current value of b (which is still 20) from the current value of a (which is now 30) and stores the result back into b . So now, b becomes 10 ($30 - 20$).
- $a = a - b$: This subtracts the current value of b (which is 10) from the current value of a (which is still 30) and stores the result back into a . So now, a becomes 20 ($30 - 10$).

Therefore, after all the calculations, a will be 20 and b will be 10.

61. Which one of the following is not essential for good questionnaires?

- a) Logically arranged
b) Avoiding personal questions
c) Limiting number of questions
d) Unlimited number of questions

Ans : (d)

Unlimited number of questions is not essential for good questionnaire.

62. Both categorical and numerical data variables can be used for _____

- a) Continuous variable
b) Class intervals
c) Distribution of frequency
d) Frequency distribution table

Ans : (d)

It is used for both categorical and numerical data variable.

63. Match the following:

- | | |
|-------------------|--------------------------------------|
| a) Mean | i. $= Q_3 - Q_1$ |
| b) Absolute value | ii. $= \text{AVERAGE}(\text{array})$ |
| c) IQR | iii. $= \text{ABS}(\text{cell})$ |
- a) a - i b - ii c - iii
b) a - ii b - iii c - i
c) a - iii b - i c - ii
d) a - i b - iii c - ii

Ans : (b)

Mean formula in Excel = Average (Array)

Absolute value formula in excel = ABS (Cell)

IQR formula = $Q_3 - Q_1$

64. _____ type of chart is used to show the relationship between numerical and categorical variable

- a) Plot b) Pie
c) Bar d) Line

Ans : (c)

Bar chart is used to show the relationship between numerical and categorical variable.

65. Who developed Python language?

- a) Zim Den b) Guido van Rossum
c) Niene Stom d) Wick van Rossum

Ans : (b)

Python was created by Guido van Rossum

66. Which one of the following is *not* the benefit of data cleaning?

- a) Removal of errors when multiple sources of data are at play
- b) Boosts results and revenue
- c) Helps with faster decision-making and more efficient business practices
- d) Consumes more time

Ans : (d)

Consuming more time is not the benefit of data cleaning.

67. Is Python code complied or interpreted?

- a) Python code is both complied and interpreted
- b) Python code is neither complied nor interpreted
- c) Python code is only complied
- d) Python code is only interpreted

Ans : (a)

Python code is first compiled into bytecode, which is an intermediate form that is not human-readable. This bytecode is then interpreted by the Python virtual machine (PVM) to execute the program.

68. Which one of the following is *not* a type of interview?

- a) Unstructured b) Semi-structured
- c) Audio recorder d) Structured

Ans : (c)

Audio recorder is not a type of interview.

69. The time, in seconds, taken by 180 athletes to run a 110 m hurdle race are tabulated below:

Class	Frequency
13.8 to 14	2
14 to 14.2	4
14.2 to 14.4	15
14.4 to 14.6	74
14.6 to 14.8	36
14.8 to 15	49

The number of athletes who completed the race in less than 14.6 seconds is:

- a) 19 b) 95 c) 131 d) 180

Ans : (b)

The number of athletes who completed the race in less than 14.6 seconds is $2 + 4 + 15 + 74 = 95$

70. The higher value of the range represents _____.

- a) greater spread of the Data
- b) lesser spread of the Data
- c) equal to range of the Data
- d) average of the Data

Ans : (a)

If range of the data is more then spread of data is also more.

71. The middle number in a given data set is called:

- a) Mean b) Mode
- c) Frequency d) Median

Ans : (d)

Median is the middle most value in arrange data.

72. _____ is the example of qualitative Data.

- a) Temperature b) Ability of students
- c) Prices d) Area

Ans : (b)

The data which cannot be numerically measurable is called qualitative data.

Ability of students are not numerically measurable.
∴ It is a qualitative data

73. Direct personal observation is a method of collection of:

- a) Secondary Data b) Primary Data
- c) Mixed Data d) Unpublished Data

Ans : (b)

Direct personal observation is one type or method of collection of primary data.

74. The in-built function to find the mean of a given data in Excel is:

- a) =AVERAGE() b) =MEAN()
- c) =MEDIAN() d) =MODE()

Ans : (a)

Excel formula for mean is = Average()

75. The formula for Relative Frequency is:

- a) Frequency \times No. of observations
- b) $\frac{\text{No. of observations}}{\text{Frequency}}$
- c) $\frac{\text{Frequency}}{\text{No. of observations}}$
- d) No. of observations + Frequency

Ans : (c)Relative frequency formula is $R.f = f/n$ **76. In Python, "str" is a:**

- a) Numeric type b) Binary type
- c) Text type d) Sequence type

Ans : (c)

- Numeric type refers to data that represents numbers, such as integers or floating-point numbers.
- Binary type stores data in binary format (0s and 1s).
- Text type (or string type) is used for textual data, like words or sentences.
- Sequence type refers to an ordered collection of items, such as lists or tuples.

77. The results of Python program get displayed in ____.

- a) IDLE 3.1.9 Window
- b) IDLE shell 3.9.1 Window
- c) IDLE shell 3.9.1 Window
- d) ILDE shell 3.1.9 Window

Ans : (c)

IDLE (Integrated Development and Learning Environment) is an integrated development environment for Python.

78. The process of Data cleaning is ____.

- a) Removing virus b) Deduplication
- c) Survey d) Google form

Ans : (b)The process of data cleaning is removing duplicate data. \therefore It is called deduplication.**79. Data collected for the first time is called:**

- a) Published Data b) Mixed Data
- c) Primary Data d) Secondary Data

Ans : (c)

The data collected for the first time directly from field by investigator is called primary data.

80. The Excel formula for standard deviation of a sample is:

- a) STDEV.P b) SDTEV.S
- c) STDEV.S d) SDTEV.P

Ans : (c)

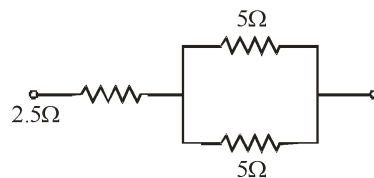
Excel formula for calculating standard deviation of a sample = STDEV.S

81. CPR stands for ____

- a) Cardio Permanent Respiration
- b) Cardio Pulmonary Respiration
- c) Cardio Pulmonary Resuscitation
- d) Cardio Pulmonary Retrieval

Ans : (c)

Explanation : CPR stands for Cardio Pulmonary Resuscitation.

82. The effective resistance of the circuit below is:

- a) 0.5 Ω b) 5 Ω
- c) 2.5 Ω d) 7.5 Ω

Ans : (b)

Explanation : From the given fig

Two 5 Ω Resistors are connected in parallel

$$R_T = \frac{R_1 \times R_2}{R_1 + R_2} = \frac{5 \times 5}{5 + 5} = \frac{25}{10} = 2.5\Omega$$

This parallel combination is connected in series with 2.5Ω Resistor.

$$\begin{aligned} R_T &= R_1 + R_2 \\ &= 2.5 + 2.5 \\ R_T &= 5\Omega \end{aligned}$$

83. The relationship between Voltage (V), Current (I) and Resistance (R) is:

- a) $I = VR$ b) $R = VI$
c) $V = IR$ d) $V = I^2R$

Ans : (c)

Explanation : According to ohm's law statement,
 $V = I \cdot R$

The ohm's law $V = IR$ describes, the relation between voltages (V), Current (I) and Resistance (R).

84. ELCB stands for:

- a) Earth Line Circuit Breaker
b) Electric Load Circuit Breaker
c) Earth Leakage Circuit Breaker
d) Electric Line Circuit Breaker

Ans : (c)

Explanation : ELCB stands for Earth leakage circuit breaker.

85. Good fuse wire must have:

- a) Low melting point
b) High melting point
c) High resistivity
d) High melting point and high resistivity

Ans : (a)

Explanation : A good fuse wire must have low melting point.

86. A 10 HP submersible pump set is used in a borewell for irrigation purpose. It normally uses _____ type of motor.

- a) Single-phase induction motor
b) Three-phase induction motor
c) DC motor
d) FHP motor

Ans : (b)

Explanation : A Three phase Induction motor is used in a borewell for irrigation purpose with a 10 HP submerise pump set.

87. SMF in batteries stands for:

- a) Sealed Moulded - Free
b) Semiconductor Maintenance - Free
c) Sealed Maintenance - Free
d) Solar Maintenance - Free

Ans : (c)

Explanation : SMF batteries stands for Sealed Maintenance Free batteries.

88. The typical use of LVDT is to sense _____.

- a) Light intensity b) Humidity
c) Pressure d) Temperature

Ans : (c)

Explanation : LVDT sensor is used to sense Displacement, Force and Pressure.

89. A p-n junction diode is a _____

- a) Bidirectional switch
b) Unidirectional switch
c) Bidirectional Controlled Switch
d) Unidirectional Controlled Switch

Ans : (b)

Explanation : A P-N junction diode is a unidirectional switch. It allows the flow of current in only one direction i.e., From Anode to Cathode terminal.

90. The purpose of C Filter in a power supply is to _____

- a) Degrade regulation
b) Reduce ripple
c) Reduce gain
d) Reduce the change of an electric shock

Ans : (b)

Explanation : The purpose of C Filter in a power supply is used to decrease unwanted ripple voltage. In a rectifier the C filter is connected in parallel with the load.

91. Lead acid cell is an example of _____

- a) Secondary cell b) Solar cell
c) Primary cell d) Fuel cell

Ans : (a)

Explanation : A secondary cell is a cell that is designed to be recharged with electricity and reused many times.

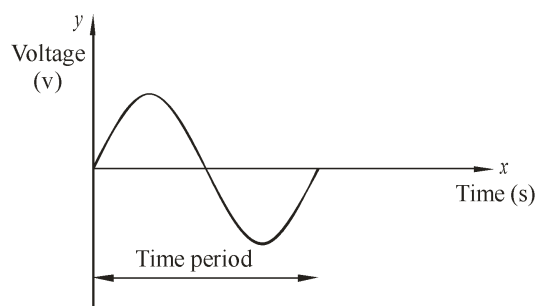
Ex : Lead-Acid, Nickel Cadmium, Lithium ion.

92. Time taken by the alternating quantity to complete one cycle is called _____

- a) Frequency b) Time period
c) Amplitude d) Wavelength

Ans : (b)

Explanation : The time taken by an alternating quantity to complete one cycle is called Time period.



93. What does "PLC" stand for in the context of Industrial Automation?

- a) Programmable Logic Circuit
b) Process Logic Controller
c) Programmable Logic Controller
d) Processor Logic Controller

Ans : (c)

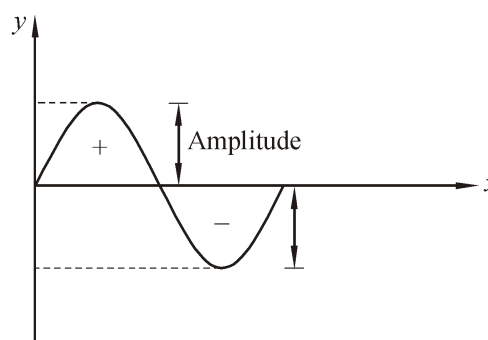
Explanation : PLC stands for Programmable Logic Controller which is used for Industrial Automation.

94. Maximum value attained by the alternating quantity either in positive half-cycle or negative half-cycle is called _____.

- a) Frequency b) Altitude
c) Amplitude d) Wavelength

Ans : (c)

Explanation : Amplitude is the maximum value attained by the Alternating quantity either in positive (or) Negative Half cycle of the waveform



95. Which of the following statement is correct?

- a) In series circuit the current through each resistor is different.
b) In parallel circuit the voltage across each resistor is same.
c) In parallel circuit the equivalent resistance is sum of individual resistances
d) In series circuit the reciprocal of equivalent resistance is sum of reciprocal of individual resistances.

Ans : (b)

Explanation : The voltage value should be same (or) equal (or) remains constant in the parallel circuit.

96. The cell which cannot be recharged and reused is _____.

- a) Secondary cell b) Battery
c) Primary cell d) Simple cell

Ans : (c)

A primary cell is a cell that is designed to be used once and discarded and not recharged with electricity and can not reused like a secondary cell.

97. Specific gravity of a fully charged lead acid battery will be in the range of _____

- a) 1000 to 1210 b) 1100 to 1310
c) 1150 to 1310 d) 1230 to 1300

Ans : (d)

Explanation : Specific gravity of a fully charged lead acid battery will be in the range of 1230 to 1280.

98. The best sensor for sensing vibration is _____

- a) Thermistor b) Thermocouple
- c) Piezoelectric crystal
- d) Hygrometer

Ans : (c)

The piezo electric crystal sensor is used for sensing vibration of an object.

99. During charging of batteries

- a) Chemical energy is converted to Mechanical energy
- b) Mechanical energy is converted to Chemical energy
- c) Electrical energy is converted to Chemical energy
- d) Chemical energy is converted to Electrical energy.

Ans : (c)

Explanation : During charging of a batteries, Electrical energy is converted to chemical energy.

100. When an electric stove is connected across 230 volts, 50 Hz AC supply for the duration of one hour and takes a current of 10 amperes, the energy consumed is:

- a) 230 units b) 2.3 units
- c) 23 units d) 0.23 units

Ans : (b)

Explanation :

$$V = 230V$$

$$I = 10A$$

$$t = 1 \text{ hr}$$

$$\text{Energy} = V \times I \times t$$

$$= 230 \times 10 \times 1$$

$$= \frac{2300}{1000} [\because \text{In terms of units Energy} \div 1000]$$

$$\text{Energy} = 2.3 \text{ units}$$

***** All the best for your D-CET Exam *****

Guaranteed Top Ranks under 1 - 500 Assured

Follow us for D-CET Updates

If you want to stay up-to-date on D-CET, follow us on Social Media

Search



tttacademics.com



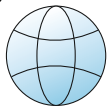
 YouTube



 facebook



 Instagram



tttpublications.com



Whatsapp Channel



Telegram



T.T.T Academy D-CET Results Consistency

2022 Rankers

DCET State **8th** Rank

Below 10 Ranks : **2 Students**

Below 100 Ranks : **14 Students**

Below 200 Ranks : **30 Students**

Below 500 Ranks : **69 Students**

Below 1000 Ranks : **121 Students**

Below 1500 Ranks : **173 Students**

Below 2000 Ranks : **205 Students**

2023 Rankers

DCET State **1st** Rank

Below 10 Ranks : **4 Students**

Below 100 Ranks : **23 Students**

Below 200 Ranks : **41 Students**

Below 500 Ranks : **98 Students**

Below 1000 Ranks : **173 Students**

Below 1500 Ranks : **234 Students**

Below 2000 Ranks : **289 Students**

2024 Rankers

DCET State **3rd** Rank

Below 10 Ranks : **2 Students**

Below 100 Ranks : **32 Students**

Below 200 Ranks : **46 Students**

Below 500 Ranks : **99 Students**

Below 1000 Ranks : **180 Students**

Below 1500 Ranks : **257 Students**

Below 2000 Ranks : **330 Students**

Trusted No. 1 D-CET Coaching Center in Karnataka



9986869970 | 9986869974 | 9986869977

OUR D-CET 2023 TOP RANK HOLDERS



1st RANK
State Topper

SANTHRUPTH H. R.



Srujan Buddar
State Rank : 7
BLDEA Vijayapura



Gopinath Ramjee
State Rank : 8
SJPN Nidasoshi



Chandana H S
SP Ramanagara
Rank : 10



Bindu S
PVP Bangalore
Rank : 19



Raghavendra
GPT Kalburgi
Rank : 25



Vivitha Sequeira
MEI Bengaluru
Rank : 28



Zhenkar Gowda K P
MEI Bengaluru
Rank : 31



Somashekara G
SJP Bengaluru
Rank : 38



Punith Giri B T
GPT Hosadurga
Rank : 50



Gokulnath S
MEI Bengaluru
Rank : 54



Hemalatha S
GPT Chitradurga
Rank : 62



Harshith
Acharya Polytechnic
Rank : 64



Vaibhav D
GPT Hiriur
Rank : 70



Balaraj S A
GPT Chennapattana
Rank : 75



Siddu R
BVVSP Hosapete
Rank : 80



Harshavardhan B
SJPNP Nidasoshi
Rank : 83



Shashank
VISSJ Shivamogga
Rank : 90 (G55)



B Girish
SGP Bellary
Rank : 90



Chandana B
MEI Bengaluru
Rank : 98



Karthik G
MEI Bengaluru
Rank : 107



Om Shivarjun
SSPT Tumakuru
Rank : 111



Chandrashekhara M
MEI Bangalore
Rank : 115



Shivakumar S
SJP Bangalore
Rank : 117



Yashwanth P
SJP Chitradurga
Rank : 119



Amol Girigowda Patil
VMSRKIT Nipani
Rank : 144



Sai Charan K
SGP Bellary
Rank : 146



Veeresh Amaragatti
BVVS Bagalkot
Rank : 150



Afnan Pasha
SJBGS Belluru Cross
Rank : 157



Praful Gowda D L
GPTI Bengaluru
Rank : 158



Hemavathi V M
PVP Bangalore
Rank : 160



Kalpitha R B
SVP Kumbura
Rank : 161



Jeevan G M
GPT Bellary
Rank : 165



Krishna N
SJP Bangalore
Rank : 166



Chandan T S
NTTF Bangalore
Rank : 169



Punith Kumar C
GPT Chitradurga
Rank : 171



Nandhini P
MEI Bengaluru
Rank : 176



Sai A Akhilandeswari
KVPT Chikkaballapura
Rank : 186



Shamarth Kumar V
SJP Bengaluru
Rank : 190



Sweta
JNP Kushnour
Rank : 192



Darshan M
SJP Bengaluru
Rank : 203



Nandhini A
MEI Bengaluru
Rank : 205



Lokesh N
HEA Bengaluru
Rank : 212



Mahanathesh K
MEI Bengaluru
Rank : 215



Sadath Khan
GPT Chintamani
Rank : 218



Gayana R
APSP Bengaluru
Rank : 219



Arun Kumar
GPT Vijaypur
Rank : 228



Sanjana Dhanjaya
NMIT Bengaluru
Rank : 239



Chethan C R
HEA Bengaluru
Rank : 247



Santhosh S
APS Bengaluru
Rank : 249



Prajna B
MEI Bengaluru
Rank : 250



Ravikanth
GPT Bidar
Rank : 253



Channappa
GPT Bidar
Rank : 270



Ekanth Gowda E
VVP Mysuru
Rank : 273



Udayshankar C A
PVP Bengaluru
Rank : 285



Gokul G
SJP Bengaluru
Rank : 291



Hemanth Kumar T
GPT K R Pete
Rank : 292



Nikhil G
MEI Bengaluru
Rank : 297



Balaji S
MEI Bengaluru
Rank : 298



Prakruthi L
MEI Bengaluru
Rank : 305



Kumaraswamy G
MEI Bengaluru
Rank : 311



Harshitha Gujjar
GPT Raichur
Rank : 313



Namratha Reddy
BGS Chikkaballapura
Rank : 317



Prajwal
SJP Bengaluru
Rank : 322



Madhushree S
GPT Bagepalli
Rank : 327



Vikas B
SKP Bengaluru
Rank : 341



Nandan Kumar S
SJP Bengaluru
Rank : 342



Vidyashree G
MNTI Bengaluru
Rank : 345



Chandan H M
BGS Chikkaballapura
Rank : 346

OUR D-CET 2024 TOP RANK HOLDERS



MANOHAR D S

3rd
RANK
MEI
Bengaluru



Lekhan C
State Rank : 8
VISSJ Shivamogga



Suhas Shetty
State Rank : 11
SVP Kumta



Pavana B V
SJP Bengaluru
Rank : 12



Disha A
PES Bengaluru
Rank : 17



T Sai Deepthi
HEA Bengaluru
Rank : 18



Abhishek H G
SDM Ujire
Rank : 20



Sounjna Bhat
SVP Kumta
Rank : 21



Chethan Gowda
NTTF Bengaluru
Rank : 21 G55



Punith B R
SJP Bengaluru
Rank : 24



Akanksha N
Bapuji Davanagere
Rank : 25



Reddy Sai Nivas
SJP Bengaluru
Rank : 30



Shilpa G
SJP Bengaluru
Rank : 40



Monisha H L
PES Bengaluru
Rank : 55



Gowtham H A
DSDP Shivamogga
Rank : 56



Harshitha Nayak K
PVP Bengaluru
Rank : 61



Flavian F Joseph
MSRIT Bengaluru
Rank : 63



Trisha D
PVP Bengaluru
Rank : 64



Vinay V
PVP Bengaluru
Rank : 66



Abhishek S
JSS Mysuru
Rank : 72



Sagar E L
MEI Bengaluru
Rank : 76



Dhanush K
MEI Bengaluru
Rank : 85



Shravan M S
Bapuji Davanagere
Rank : 86



Navya G
SVP Kumta
Rank : 87



Yogaraj V
MEI Bengaluru
Rank : 91



Bhuvan A
East West Bengaluru
Rank : 94



Mithun G
SJP Bengaluru
Rank : 99



Gayathri S
PVP Bengaluru
Rank : 104



Parinika S
HEA Bengaluru
Rank : 107



Prashanth
SDM Ujire
Rank : 116



Abhay N Y
PES Bengaluru
Rank : 127



Vidyashree V
MEI Bengaluru
Rank : 128



Shreenanda S Nayak
GPT Chitradurga
Rank : 135



Sai Aakanksha
Bapuji Davanagere
Rank : 138



Sunaina Babu U
GWP Bengaluru
Rank : 142



Harshitha G
SJP Bengaluru
Rank : 144



Samruddhi Jirli
SRVRP Guledagudda
Rank : 146



Yasin Suhail
MEI Bengaluru
Rank : 149



Abhishek Kotyal
GPT
Rank : 155



Ashwini L
GWP Bengaluru
Rank : 157



Vipul Reddy
MSRIT Bengaluru
Rank : 159



Sagar Kagi
KLE Mahalingapura
Rank : 161



Jayashree G
HEA Bengaluru
Rank : 172



Prajwal K S
DSDP Shivamogga
Rank : 175



Sumathi C
MEI Bengaluru
Rank : 177



Bhumi
PVP Bengaluru
Rank : 183



Manali
GPT Bidar
Rank : 188



Kallesh J
SJP Bengaluru
Rank : 198



R V Kirthanana
Acharya Bengaluru
Rank : 199



Priyadarshini
MEI Bengaluru
Rank : 208



Vanaja E
MEI Bengaluru
Rank : 211



Chandan K M
GPT Tumkur
Rank : 217



Lokesh Gowda
BETP KM Doddi
Rank : 222



Darshan Gowda
SJP Bengaluru
Rank : 227



Dikshith S
SJP Bengaluru
Rank : 243



Akash G S
GPT Channapattana
Rank : 245



Anant Ganapathi
SVP Kumta
Rank : 248



Disha C
MEI Bengaluru
Rank : 249



Meghana U
MEI Bengaluru
Rank : 255



Sheshagiri S
GPT Chitradurga
Rank : 258



Vikas C
SSPT Tiptur
Rank : 260



Suraj T P
Siddaganga Tumkur
Rank : 277



Sai Ram Hatti
GPT Vijayapura
Rank : 280



Vikas T P
Bapuji Davanagere
Rank : 281



Chandan Kumar C L
MEI Bengaluru
Rank : 288



Sujith K N
VISSJ Shivamogga
Rank : 303



Sai Charan B K
MEI Bengaluru
Rank : 308



Tejas B
JSS Mysuru
Rank : 310



Nikhil R
MNTI Bengaluru
Rank : 315

D-CET

Diploma Common Entrance Test (D-CET) is one of the preliminary exams for diploma holders to get seats in the engineering colleges. Overwhelming response to our books on various subjects has inspired us to write this book.

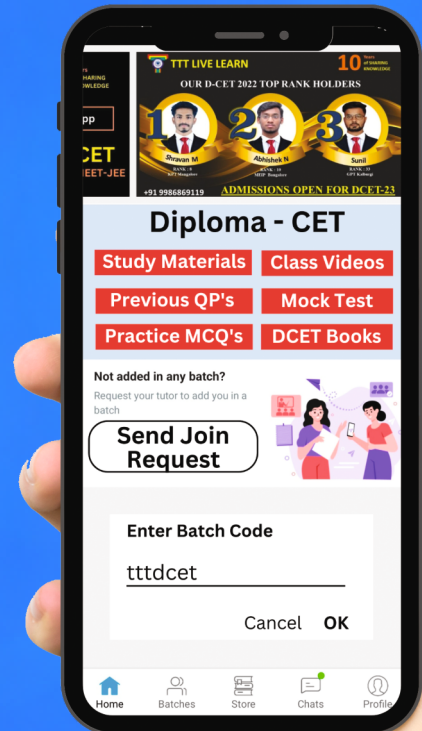
App Features

- Easy to use, anywhere, anytime
- Personalized Experience
- Study Materials
- Previous Year Question Papers with Solutions
- Practice MCQ's
- Free Mock Tests
- D-CET Class Videos

Includes

- Introduction to D-CET Entrance Exam
- Syllabus, Exam Pattern and Important Dates
- D-CET 2023 & 2024 Question Paper with Solutions

TTT Live Learn App



Batch code : tttdcet



Play Store



App Store

ORG Code : uxsoa

T.T.T Academy

Diploma CET Training Centre

PEENYA Branch Bangalore
Mob.: 9986869970

VIJAYANAGAR Branch Bangalore
Mob.: 9986869966

D-CET 2025 Updates, Information
& Free Mock Test

Join Our
WhatsApp Channel
Link Contact us
9986869970

D-CET Coaching for All the Departments



T.T.T PUBLICATIONS

#8, Opp. to M.E.I Colony Bus Stop, Peenya, Bangalore - 560 058.
Mob. : 9986869945 / 55 / 66, Email : tttpublications01@gmail.com



www.tttaacademics.com



TTT Academy